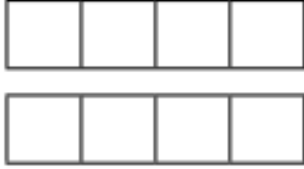


Green

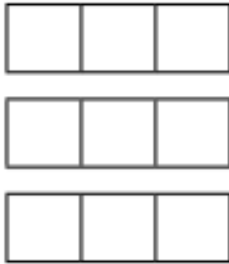


1) Colour the bar models to represent the fractions shown and then complete the statements converting the improper fractions into mixed numbers.

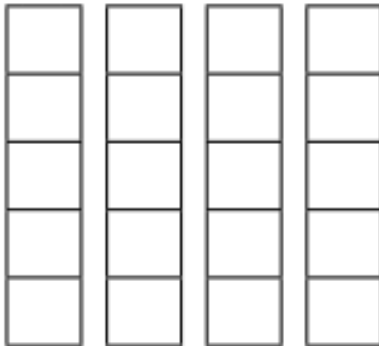
a) $\frac{5}{4}$ is equivalent to _____.



b) $\frac{8}{3}$ is equivalent to _____.



c) $\frac{16}{5}$ is equivalent to _____.



2) Now, convert these improper fractions into mixed numbers. Use drawings or cubes to help you, if needed.

a) $\frac{15}{6} =$ _____

b) $\frac{14}{4} =$ _____

c) $\frac{23}{5} =$ _____

d) $\frac{13}{4} =$ _____