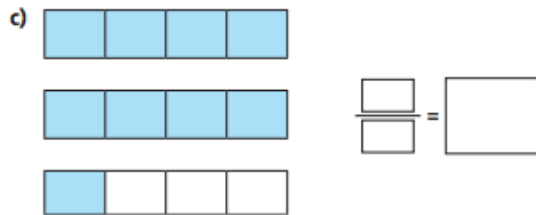
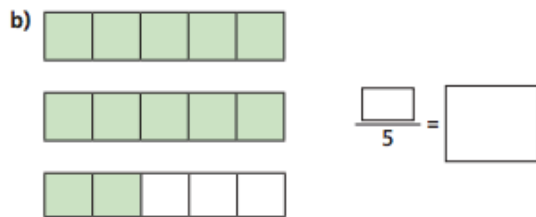
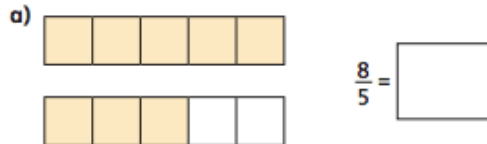


Orange

Improper to mixed numbers

1 Convert the improper fractions to mixed numbers.



2 Shade bar models to represent each improper fraction.

Convert the improper fractions to mixed numbers.

a) $\frac{7}{3}$ b) $\frac{8}{3}$ c) $\frac{9}{4}$ d) $\frac{11}{4}$

3 Convert the improper fractions to mixed numbers.

a) $\frac{10}{2}$ c) $\frac{10}{4}$ e) $\frac{12}{5}$ g) $\frac{13}{7}$
b) $\frac{10}{3}$ d) $\frac{10}{5}$ f) $\frac{13}{6}$ h) $\frac{31}{8}$

4 Eva has 7 bottles of juice.

Each bottle contains half a litre of juice.



How many litres of juice does Eva have altogether?

Write your answer as a mixed number.