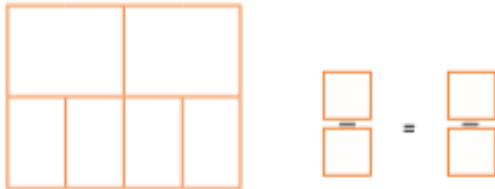




1) Label the fractions and identify the equivalents for one half.

a) One half is equivalent to _____






b) _____ is equivalent to _____



c) _____ is equivalent to _____



2) Is the fraction in the table equivalent to $\frac{2}{4}$?
Complete the table.

Fraction	Is it equivalent to $\frac{2}{4}$? ✓ or ✗
a) 	
b) 	
c) 	

3) Hana, Isla and Fabien all had a bar of chocolate the same size. Hana ate two quarters of her bar of chocolate. Isla ate three sixths of her chocolate and Fabien ate five tenths of his chocolate. Who ate the most?
