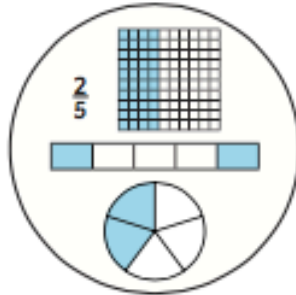
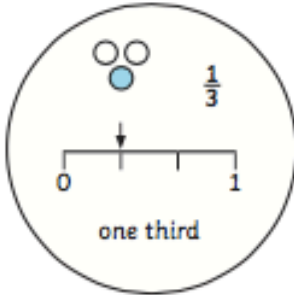


## Orange

1) Harry has sorted these fractions. Do you think he is correct? Explain your reasoning.




---



---



---

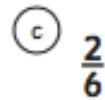


---



---

2) Which is the odd one out and why?




---



---

3) Look at the image below. Read the statements and complete the table.

	Statement	True or False?
	The image represents $\frac{3}{4}$ .	
	The image represents two thirds.	
The image represents this fraction.		