






Measuring Area of Chocolate Boxes

Find the area of the chocolate boxes and record your answers

1.		2.		Area = <input type="text"/>
	Area = <input type="text"/>			
3.		4.		Area = <input type="text"/>
	Area = <input type="text"/>		Area = <input type="text"/>	
5.		Area = <input type="text"/>		

Measuring Area of Chocolate Boxes **Questions**

1. What is the area of chocolate box number 2?

2. Which chocolate box has the largest area?

3. Which chocolate box has the smallest area?

4. What is the difference in area between chocolate box number 1 and 5?
