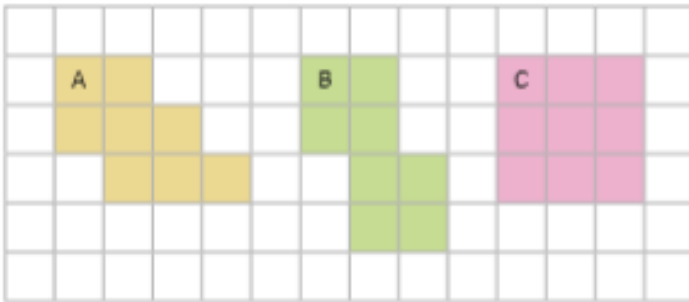


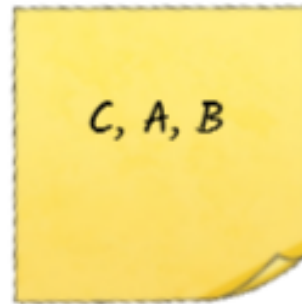
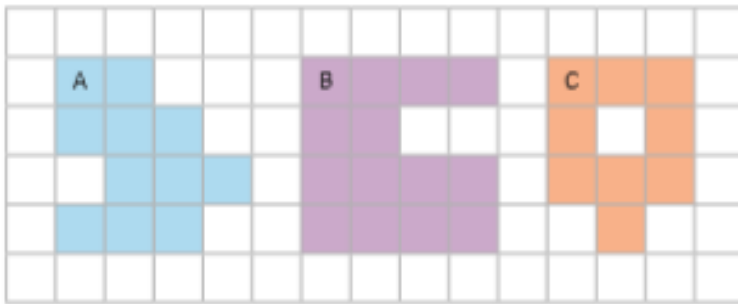
Orange



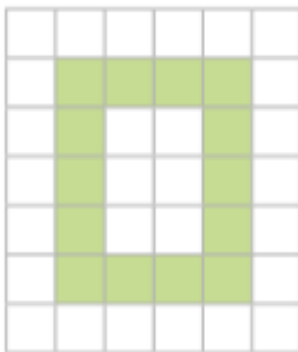
1) Which is the odd one out? Explain why.



2) Gavin has been asked to order these rectilinear shapes from the one with the greatest area to the one with the smallest area. His teacher has marked his answer as wrong and he is confused. Can you spot and explain the mistake he has made?



3) Kylie and Marcel are having a disagreement over whose shape has the greater area. Who do you think is correct? Explain your reasoning.



My shape has the greater area because it is taller than Marcel's.



My shape has the greater area because it is all filled in and does not have gaps in the middle like Kylie's.

