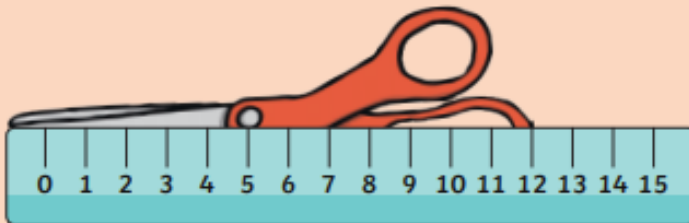


## Measure Length (2)



The scissors are 12cm long.



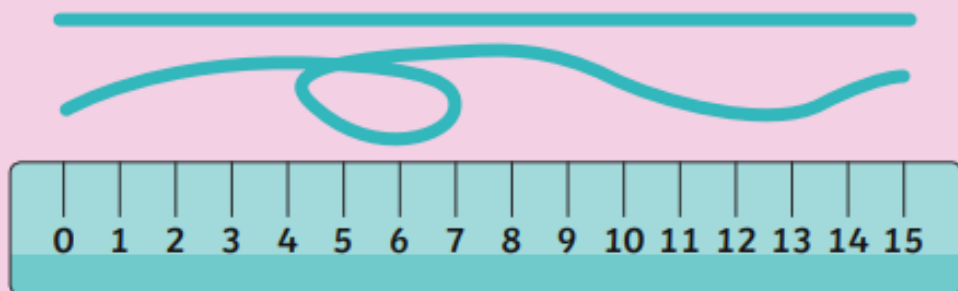
Do you agree?  
Explain why or  
why not.

The book is 13 centimetres tall.



Is this correct?  
Tell me about  
your answer.

The ribbons are both 15cm long.



Is this true? Can you find a way to prove it?

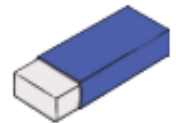
## Measure Length (2)



### 15 centimetre challenge

Measure the length of objects and sort them into groups.

Shorter than 15cm



The same as 15cm



Longer than 15cm



Measure the height of the towers.

If you built a tower shorter than the blue tower but taller than the yellow tower, how tall could it be?

