


1 a) Which is the taller flower?



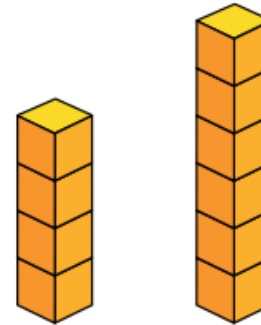
b) Which is the shorter tree?



c) Which is the longest ribbon?



d) Which is the taller tower?



2 Complete the sentences.



- C is longer than \_\_\_\_\_
- \_\_\_\_\_ is the longest train.
- \_\_\_\_\_ is the shortest train.

3 Complete the sentences.



Annie



Rosie



Mo


- a) \_\_\_\_\_ is the tallest.
- b) Mo is taller than \_\_\_\_\_.
- c) \_\_\_\_\_ is the shortest.

Compare the heights of your friends.

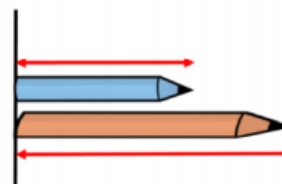
Use the words **taller** and **shorter** in the sentence stems to compare the height of the man and the boy.

The man is  than the boy.

The boy is  than the man.



Use the words **longer** and **shorter** in the sentence stems to compare the length of the blue pencil and the orange pencil.



The blue pencil is  than the orange pencil.

The orange pencil is  than the blue pencil.

Which pencil is the longest? Which pencil is the shortest?

Compare the vehicles using the words to help you.



length height  
longer same  
taller shorter

Rosie, Alex and Mo are comparing the height of Mrs Rose and Jack.



Rosie



Mrs Rose is tall than Jack.

Alex



Jack is short than Mrs Rose.

Mo




Mrs Rose is longer than Jack.

Can you improve their sentences to make them more accurate?

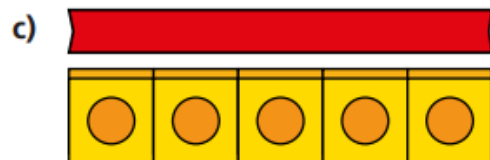

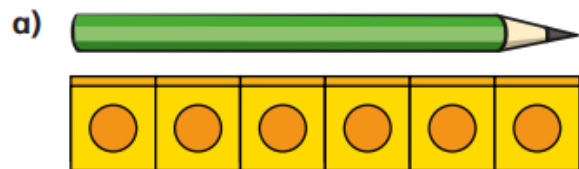
## Wednesday Extension Worksheet

Eva thinks the pencils are the same length.



How can Eva check if she is correct?

1 How many cubes long is each object?



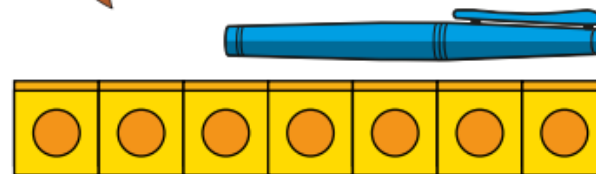
d) Use cubes to measure some objects in your classroom.



2



The pen is 7 cubes long.


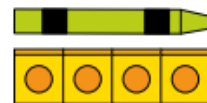


Do you agree with Rosie?  
Talk about it with a partner.



3

Tommy is measuring objects.



The car and the crayon are the same length.

Do you agree with Tommy?



4 Measure objects in your classroom with these items.


- cubes
- hands
- sticks

Which object is the longest?

Which is the shortest?

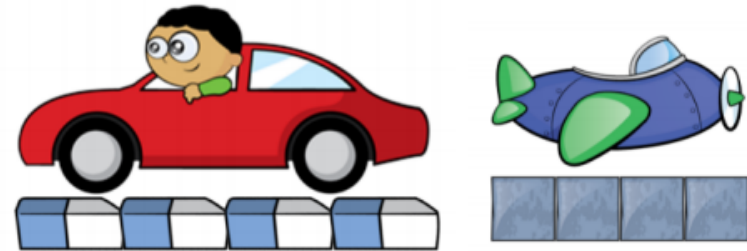
How do you know?

True or false?



The flower is 8 cubes tall.  
Explain your answer.

Whitney measures the length of two toys.



She says,



The toys are the same length.

Do you agree with Whitney?  
Explain your answer.