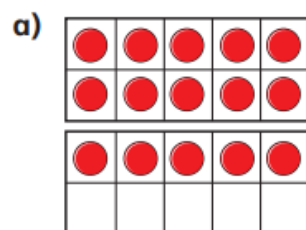
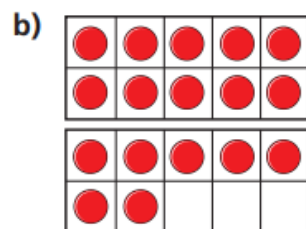


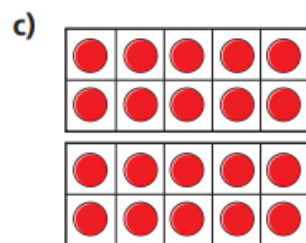
1 Cross out counters to work out the subtractions.



$$15 - 4 = \square$$



$$17 - 5 = \square$$



$$\square = 20 - 3$$

2 Teddy has these shapes.



He gives Eva 3 cones.

How many cones does Teddy have left?

3 Complete the subtractions.

a) $13 - 2 = \square$

c) $15 - 4 = \square$

b) $14 - 3 = \square$

d) $16 - 5 = \square$

What do you notice?


Use this to fill in the missing numbers.

$$17 - \square = 11$$

$$19 - \square = 11$$



1 Ron uses a number track to work out $15 - 3$



$15 - 3 = 12$

Use the number track to help you work out the subtractions.



a) $14 - 3 =$

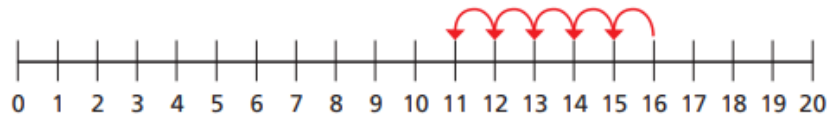
c) $14 - 4 =$

b) $15 - 4 =$

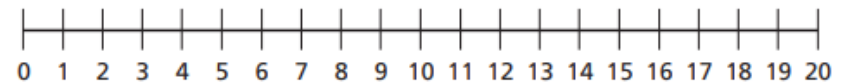
2 Use the number lines to help you.



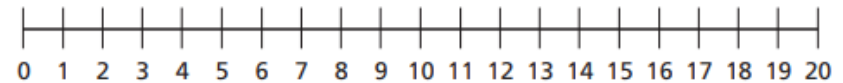
a) $16 - 5 =$



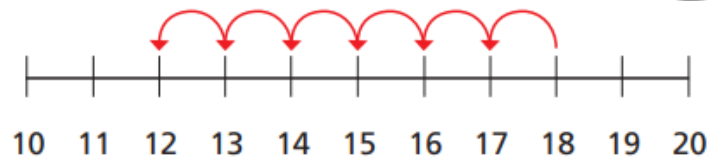
b) $18 - 4 =$



c) $19 - 5 =$



3 Sam uses a number line to work out a subtraction.



Complete Sam's subtraction. - =

Thursday: Subtraction by counting back (not crossing 10) practise.



Number Line

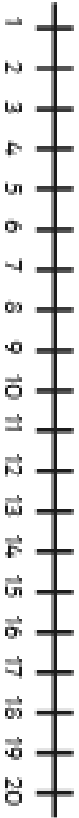
Subtraction

Example:

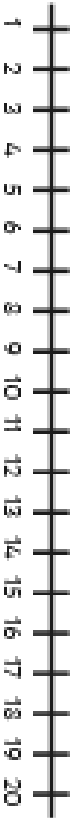
$$\underline{20} - 5 = 15$$



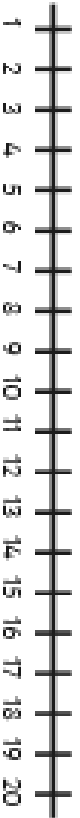
$$20 - 3 =$$



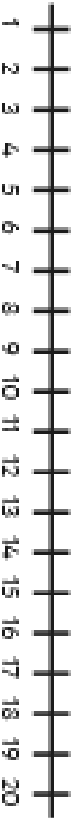
$$9 - 4 =$$



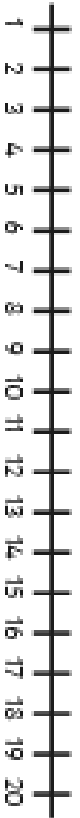
$$18 - 2 =$$



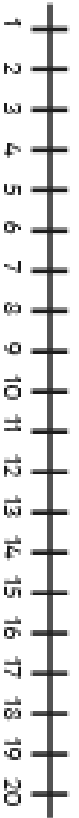
$$10 - 6 =$$



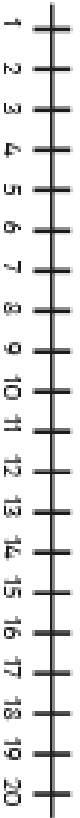
$$17 - 3 =$$



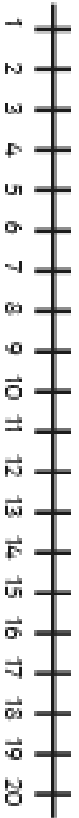
$$8 - 8 =$$



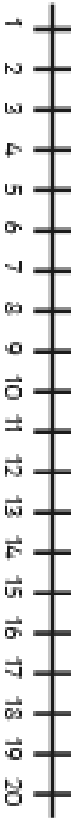
$$13 - 1 =$$



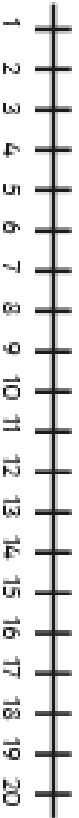
$$19 - 8 =$$



$$15 - 3 =$$



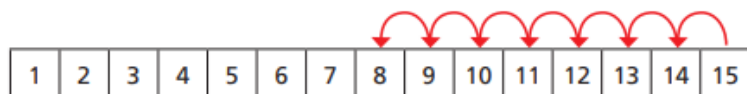
$$16 - 6 =$$



- 1 There are 15 cookies in a jar.

Mo eats 7 cookies.

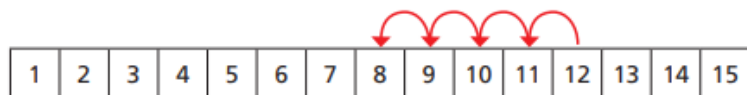
He counts back 7 from 15



How many cookies does Mo have left?

- 2 Use the number tracks to help you.

a) $12 - 4 =$



b) $12 - 5 =$

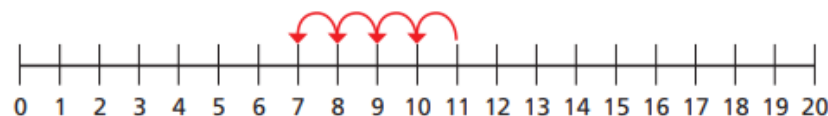


c) $12 - 7 =$

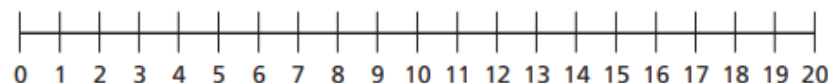


- 3 Use the number lines to help you.

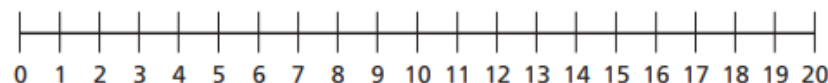
a) $11 - 4 =$



b) $16 - 9 =$



c) $14 - 11 =$

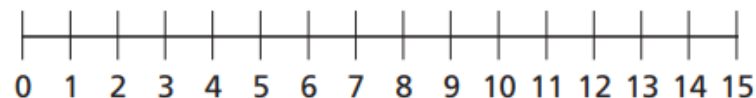


- 4 There are 13 toys in a box.

Kim takes some toys out of the box.

There are 5 toys left in the box.

How many toys does Kim take out of the box?



Friday: Subtraction by counting back (crossing 10) practise.



Number Line Subtraction

$20 - 17 =$	
$12 - 4 =$	
$18 - 12 =$	
$11 - 3 =$	
$17 - 5 =$	
$12 - 2 =$	
$13 - 4 =$	
$20 - 8 =$	
$15 - 7 =$	
$19 - 11 =$	