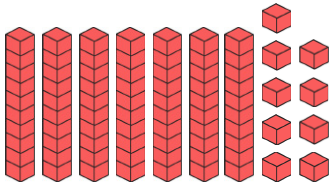


Year 1 Maths Activity Mat

6

Section 1

Write the number in the box.



Section 2

Can I buy the sunglasses?



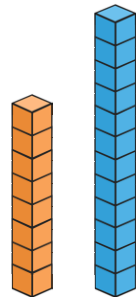
Section 3

What numbers come next?

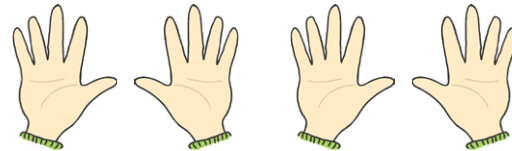
84	82	80			
----	----	----	--	--	--

Section 4

How many cubes taller is the blue tower than the orange tower?



Section 5

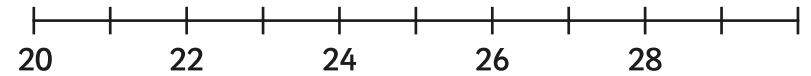


4 lots of 5 fingers =

Section 6

Put these numbers on the number line.

23 30 25 21 27 29



Section 7

20 is 1 more than

17 is 1 more than


Section 8

Archie has eaten 2 sausages.

He has 3 left.

How many sausages did he have to start with?

Write a number sentence to show this.

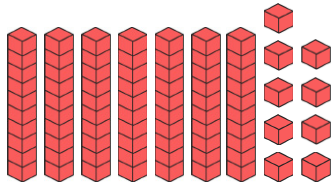


Year 1 Maths Activity Mat: 6

Answers

Section 1

Write the number in the box.



79

Section 2

Can I buy the sunglasses?



no

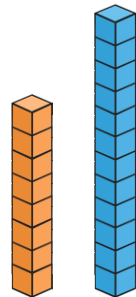
Section 3

What numbers come next?

84 82 80 **78** **76** **74**

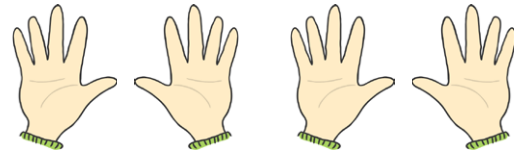
Section 4

How many cubes taller is the blue tower than the orange tower?



4

Section 5

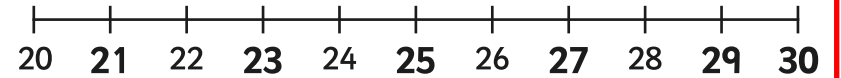


4 lots of 5 fingers = **20 fingers**

Section 6

Put these numbers on the number line.

23 30 25 21 27 29



Section 7

20 is 1 more than

19

17 is 1 more than

16


Section 8

Archie has eaten 2 sausages.

He has 3 left.

How many sausages did he have to start with?

Write a number sentence to show this.



5 - 2 = 3