










Birthday number bond candles

How many more candles to make 9? Finish each number sentence.

		
2 + <input type="text"/> = 9	5 + <input type="text"/> = <input type="text"/>	<input type="text"/> + <input type="text"/> = <input type="text"/>
		
<input type="text"/> + <input type="text"/> = <input type="text"/>	<input type="text"/> + <input type="text"/> = <input type="text"/>	<input type="text"/> + <input type="text"/> = <input type="text"/>
		
<input type="text"/> + <input type="text"/> = <input type="text"/>	<input type="text"/> + <input type="text"/> = <input type="text"/>	<input type="text"/> + <input type="text"/> = <input type="text"/>

Find the missing numbers. It could help to point at the first number and count on...

$5 + \square = 9$

$6 + \square = 8$

$\square + 6 = 9$

$3 + \square = 8$

$\square + 2 = 9$

$1 + \square = 8$