

Practice Sheet Mild
Addition and subtraction word problems

Decide which type of calculation would be best to solve each word problem, then find the answers.

1. Hayley normally has 48 pencils in her pencil pot, but 16 are missing. How many does she have left?
2. There are 24 socks on the line and another 12 in the washing machine. How many socks are there altogether?
3. Nancy has eaten 23 berries but there are still another 15 on her plate. How many berries did she have to start with?
4. Noah picked up 25 pebbles from the beach and put them in his pocket. 15 fell out on the way home. How many are still in his pocket?
5. Harry has 24 football cards and Georgia has 55. How many do they have altogether?
6. Polly has 17 grapes in her bowl and Jacob has 17 in his. How many are there altogether?

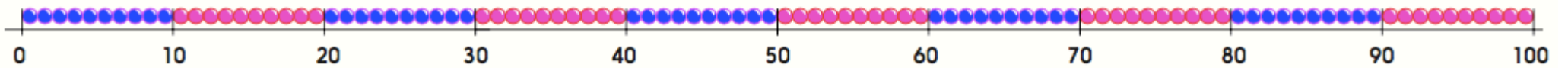
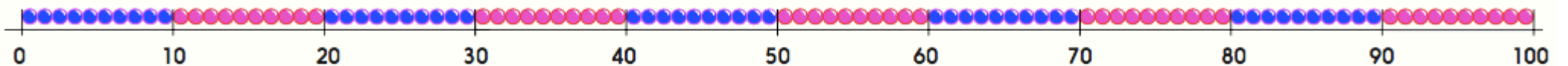
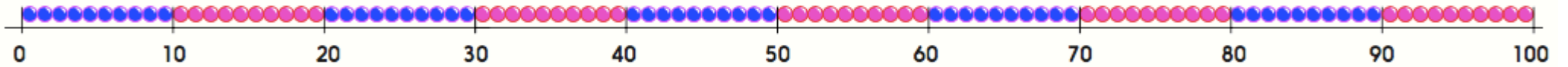
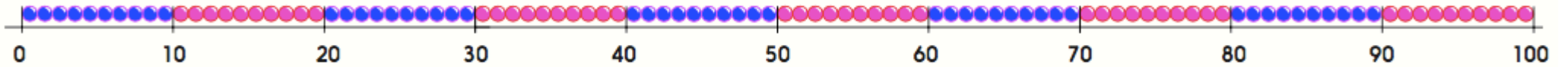
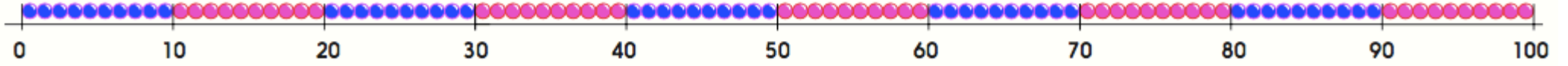
Practice Sheet Mild

Addition and subtraction number problems

1	2	3	4	5	6	7	8	9	10
11	12	13	14	15	16	17	18	19	20
21	22	23	24	25	26	27	28	29	30
31	32	33	34	35	36	37	38	39	40
41	42	43	44	45	46	47	48	49	50
51	52	53	54	55	56	57	58	59	60
61	62	63	64	65	66	67	68	69	70
71	72	73	74	75	76	77	78	79	80
81	82	83	84	85	86	87	88	89	90
91	92	93	94	95	96	97	98	99	100

Practice Sheet Mild

Addition and subtraction number problems



Practice Sheet Hot

Addition and subtraction word problems

Decide if it is best to add or subtract to solve these problems. Write out a number sentence and then solve.

1. Hayley normally has 48 pencils in her pencil pot, but 16 are missing. How many does she have left?
2. There are 24 socks on the line and another 12 in the washing machine. How many socks are there altogether?
3. Nancy has eaten 23 berries but there are still another 15 on her plate. How many berries did she have to start with?
4. Noah picked up 25 pebbles from the beach and put them in his pocket. 15 fell out on the way home. How many are still in his pocket?
5. Harry has 24 football cards and Georgia has 55. How many do they have altogether?
6. Polly has 17 grapes in her bowl and Jacob has 17 in his. How many are there altogether?
7. There are 35 biscuits in one packet and 44 in another. How many are there altogether?
8. Aimee used 56 Lego™ bricks to build her tower, while Angus used 33. How many bricks did they use between them?
9. George ate 14 blueberries from the fruit bowl. There were 48 to start with. How many are there now?
10. Khalid collected 72 stickers but gave 21 of them away. How many does he have in his collection now?

Challenge

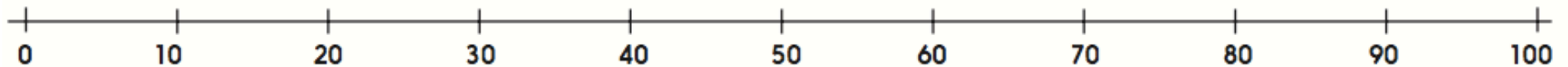
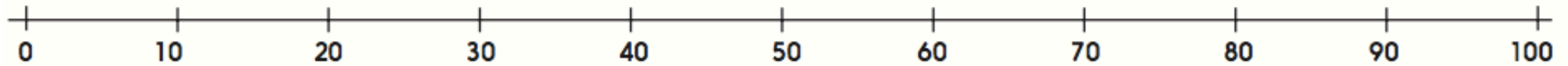
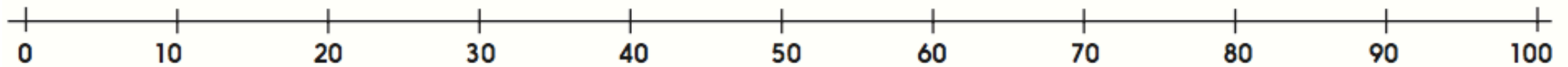
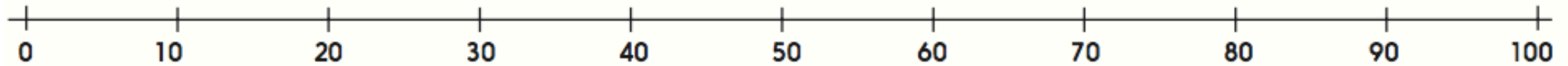
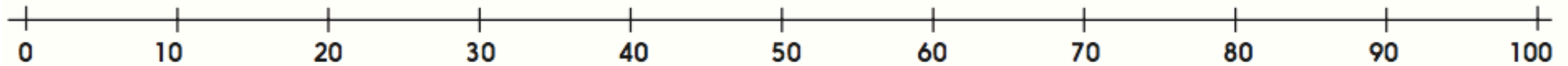
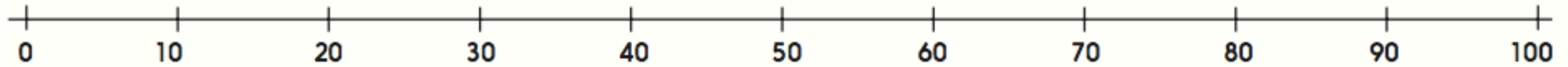
Can you write a word problem that requires addition and subtraction?

Practice Sheet Hot
Addition and subtraction number problems

1	2	3	4	5	6	7	8	9	10
11	12	13	14	15	16	17	18	19	20
21	22	23	24	25	26	27	28	29	30
31	32	33	34	35	36	37	38	39	40
41	42	43	44	45	46	47	48	49	50
51	52	53	54	55	56	57	58	59	60
61	62	63	64	65	66	67	68	69	70
71	72	73	74	75	76	77	78	79	80
81	82	83	84	85	86	87	88	89	90
91	92	93	94	95	96	97	98	99	100

Practice Sheet Hot

Addition and subtraction word problems



Practice Sheets Answers

Addition and subtraction word problems (mild)

1. Hayley has 32 pencils left.
2. There are 36 socks altogether.
3. Nancy had 38 berries to start with.
4. Noah still has 10 pebbles in his pocket.
5. They have 79 cards altogether.
6. There are 34 grapes altogether.

Addition and subtraction word problems (hot)

1. Hayley has 32 pencils left.
2. There are 36 socks altogether.
3. Nancy had 38 berries to start with.
4. Noah still has 10 pebbles in his pocket.
5. They have 79 cards altogether.
6. There are 34 grapes altogether.
7. There are 79 biscuits altogether.
8. Aimee and Angus used 89 bricks between them.
9. There are 34 berries left in the bowl.
10. Khalid has 51 stickers left in his collection.