

## Practice Sheet Answers

### Practice Sheet (Mild)




Triangular prism  
5 faces  
6 vertices



Cube  
6 faces  
8 vertices



Sphere  
1 face  
0 vertices



Square-based  
pyramid  
5 faces  
5 vertices



Cylinder  
3 faces  
0 vertices









Cuboid  
6 faces  
8 vertices



Cone  
2 faces  
1 vertex

### Practice Sheet (Hot)

Shape	Number of faces	Shape of faces	Will it roll, slide or do both?	Number of vertices (corners)
	3	2 circles and one curved face	both	0 vertices
	6	6 rectangles (2 of which could be squares)	slide	8
	2	1 circle and one curved face	both	1
	6	6 squares	slide	8
	5	1 square and 4 triangles	slide	5
	1	1 curved face	roll	0 vertices