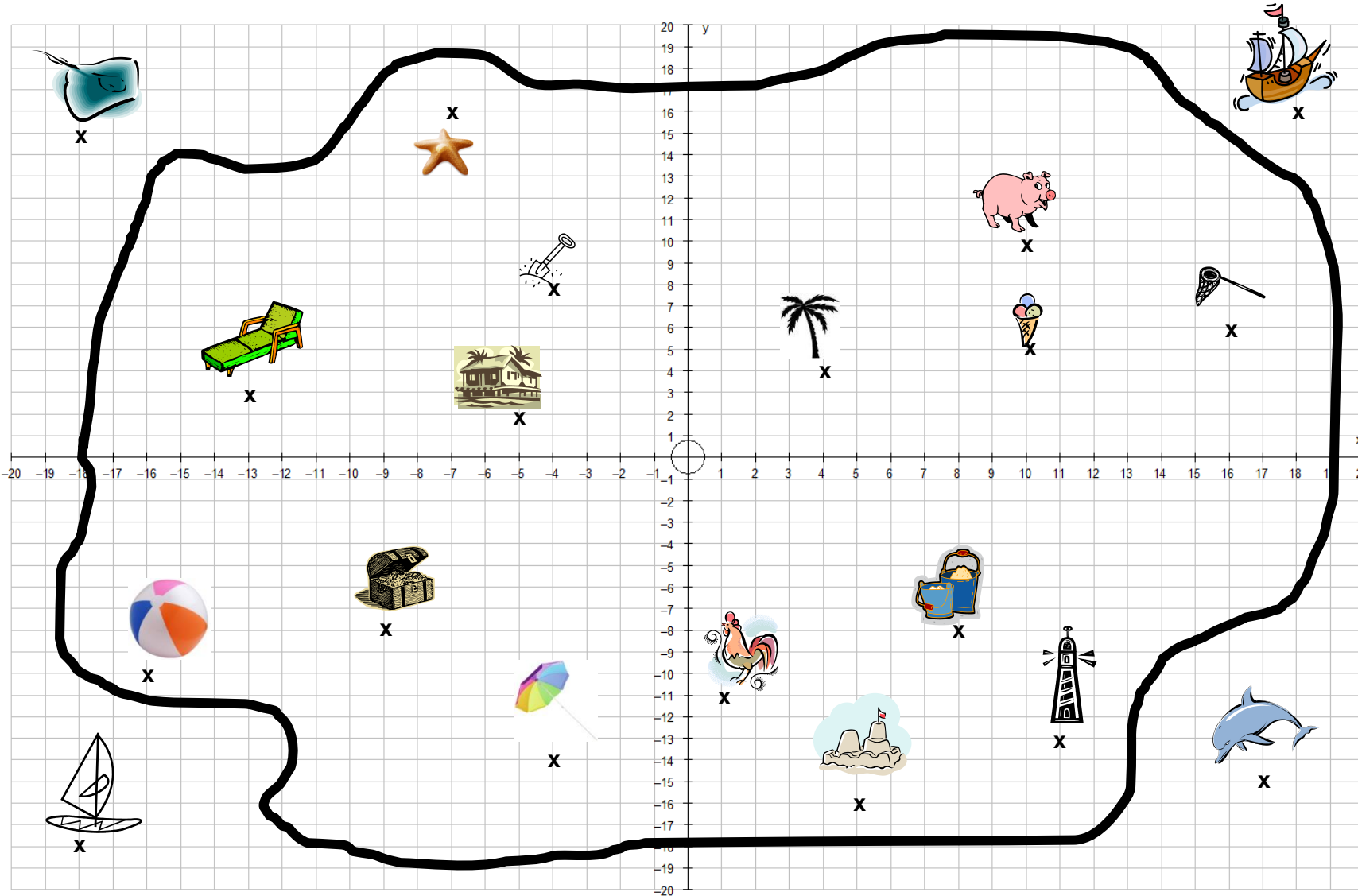








Name: _____

Island Coordinates



1. What are the coordinates of (shown by the x):

- a) 
- b) 
- c) 
- d) 
- e) 
- f) 
- g) 
- h) 

2. Draw an x at the points (label with the letter):

- a) (8,8)
- b) (3, -16)
- c) (-2, 3)
- d) (-10, -6)
- e) (14, -4)
- f) (1, 8)
- g) (-17, 2)
- h) (-11, -9)

3. What is at the point:

- a) (17, -15)
- b) (-7, 16)
- c) (4, 4)
- d) (-18, -18)
- e) (-4, 8)

4. What are the coordinates of (shown by the x):

- | | |
|--|--|
| a)  | e)  |
| b)  | f)  |
| c)  | g)  |
| d)  | |

5. Draw these coordinates (label with the letter):

- i) (12, 2) j) (-9, 10) k) (-8, -12) l) (3, -3)

6. At what coordinate is the treasure?

Ext: Describe how to get to the treasure from: a) the beach house.

b) the lighthouse.