











WALT: find the percent of a price in order to find the discounted price.

Product	Original Price	Discounted Price
	£2.80	
	80p	
	£10.44	
	£8.80	
	£5.50	
	£2	
	£1.28	
	£1.60	
	£4.20	
	£12.60	

Challenge Questions

<p>1). How much did the <u>original</u> shopping bill cost?</p>	
<p>2). How much did the discounted shopping bill cost?</p>	
<p>3). How much money was saved with <u>the discounts</u>?</p>	
<p>4). What <u>change</u> would be given from a <u>fifty pound note</u> if the shopping was bought at the <u>discounted price</u>?</p>	
<p>5). What <u>four</u> items could be bought at the discounted price for <u>£5</u>?</p>	
<p>6). There are 4 Twix bars to each box, how many bars could you buy at the original price for £100.</p>	