





## Starter Question to work out and discuss

Match each description to the correct number.

My number has the same amount of tens and tenths.  Teddy

 My number has one decimal place. Amir

My number has two hundredths.  Rosie

 My number has six tenths. Eva

46.2   2.64   46.02   40.46